

Maths

Week 9

1. $34.12 + 45.67 =$

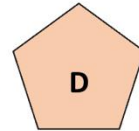
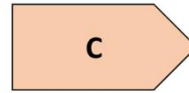
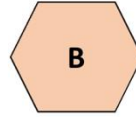
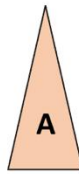
1 mark

2. _____ = 398×7

A 10x10 grid with a 2x2 rectangle highlighted in the bottom right corner.

1 mark

3. Write down the letters of the shapes below which are **irregular**.



SPaG

1. Tick the pair of verbs that completes the sentence below.

The baker _____ the icing along the edges of the cake as he _____ the turntable around.

Tick one

piping

spins

1

piped

spun

2

pipes

spinning

3

pipng

spin

4

2. Insert a pair of dashes in the correct place in the sentence below.

Mrs Collins my favourite teacher from primary school travelled over 50 miles to attend my graduation!

3. a) Write a sentence using the word smell as a **verb**.

1 mark

b) Write a sentence using the word smell as a **noun**.

1 mark

Reading

When you think of the harm and chaos that volcanos cause, you might think about big blasts and flying rocks. You might know that red-hot lava can pour down the side of the mountain, burning everything in its path and crushing communities. You might have even read about how the people of Pompeii in ancient Rome could not escape the deadly ash and gasses. But did you know that the impact of a volcano can be felt for hundreds if not thousands of miles? When one erupted in Iceland in 2010, the smoke grounded aircraft for weeks across much of Europe.

1. Which word is closest in meaning to **chaos**? **Tick one**.

confusion

☐

lava

☐

damage

☐

chase

☐

2. **Find** and **copy** the word in the first sentence that is closest in meaning to **explosions**.

3. According to the text, what can lava crush?
